

Name : _____

Score : _____

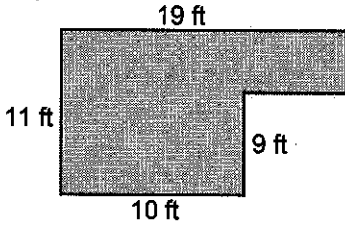
Teacher : _____

Date : _____

Compound Shapes

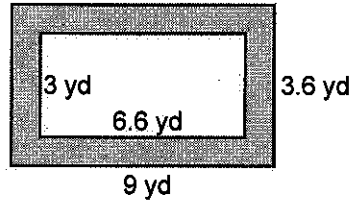
Find the area of each figure, round your answer to one decimal place if necessary.

1)



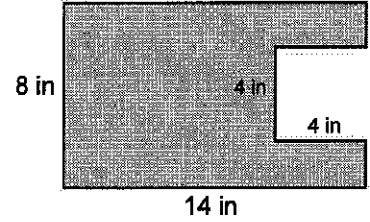
Area: _____

2)



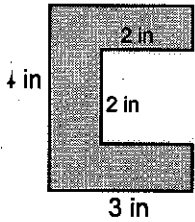
Area: _____

3)



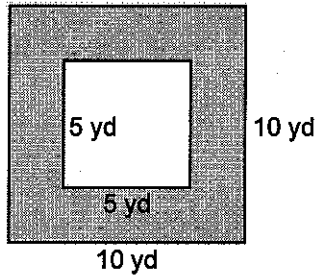
Area: _____

4)



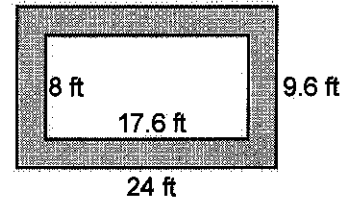
Area: _____

5)



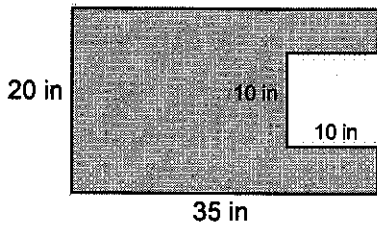
Area: _____

6)



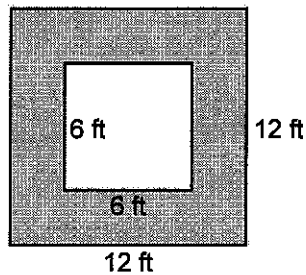
Area: _____

7)



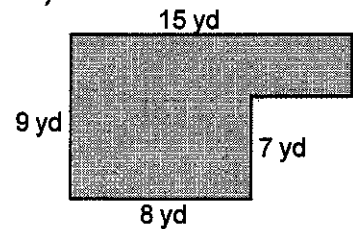
Area: _____

8)



Area: _____

9)



Area: _____

Name : _____

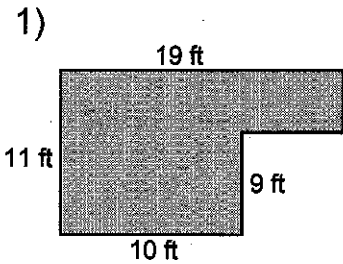
Score : _____

Teacher : _____

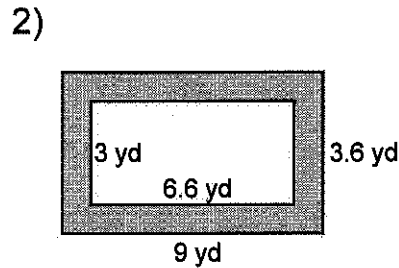
Date : _____

Compound Shapes

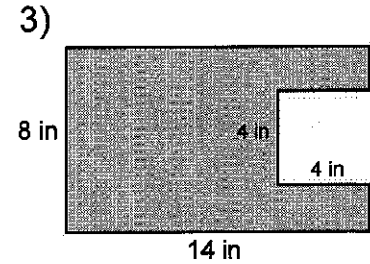
Find the area of each figure, round your answer to one decimal place if necessary.



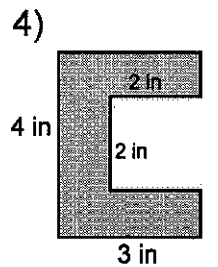
Area: 128 ft²



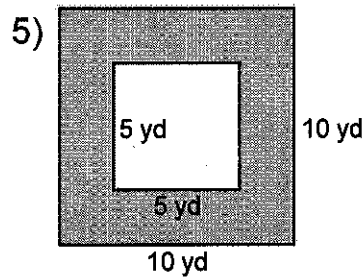
Area: 12.6 yd²



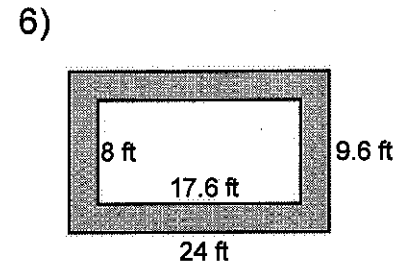
Area: 96 in²



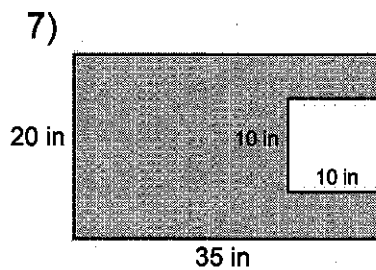
Area: 8 in²



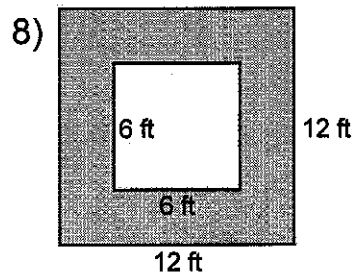
Area: 75 yd²



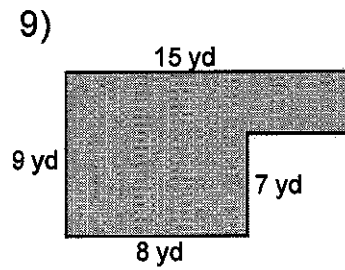
Area: 89.6 ft²



Area: 600 in²



Area: 108 ft²



Area: 86 yd²